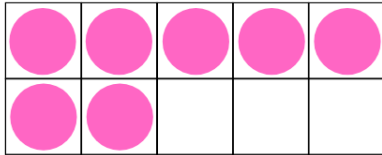
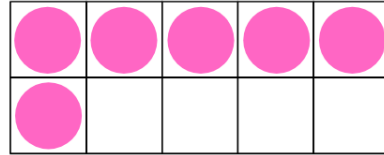
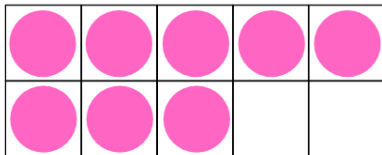


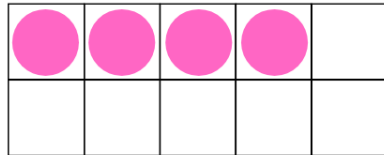
Chapter 8: Addition (2 digits within 50)

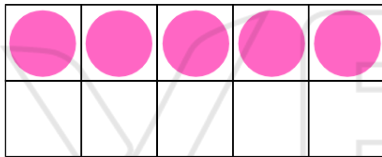
How many more to make 10?

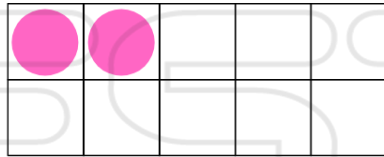


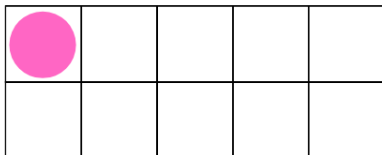





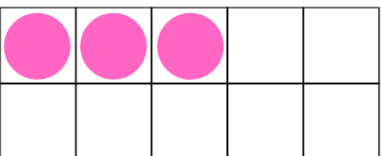















Add the two numbers on the seashells.

$$12 + 6 =$$

$$9 + 8 =$$

$$7 + 5 =$$

$$18 + 2 =$$

$$11 + 7 =$$

$$13 + 6 =$$

Let's add the numbers!

$$\begin{array}{r} 16 \\ +23 \\ \hline \end{array}$$

$$\begin{array}{r} 24 \\ +14 \\ \hline \end{array}$$

$$\begin{array}{r} 35 \\ + 11 \\ \hline \end{array}$$

$$\begin{array}{r} 18 \\ +22 \\ \hline \end{array}$$

$$\begin{array}{r} 27 \\ +23 \\ \hline \end{array}$$

$$\begin{array}{r} 12 \\ +17 \\ \hline \end{array}$$

$$\begin{array}{r} 29 \\ + 1 \\ \hline \end{array}$$

$$\begin{array}{r} 45 \\ + 2 \\ \hline \end{array}$$

$$\begin{array}{r} 36 \\ +14 \\ \hline \end{array}$$

$$\begin{array}{r} 22 \\ +22 \\ \hline \end{array}$$

$$\begin{array}{r} 5 \\ +37 \\ \hline \end{array}$$

$$\begin{array}{r} 27 \\ +22 \\ \hline \end{array}$$

$$\begin{array}{r} 15 \\ +3 \\ \hline \end{array}$$

$$\begin{array}{r} 32 \\ +9 \\ \hline \end{array}$$

$$\begin{array}{r} 44 \\ + 1 \\ \hline \end{array}$$

$$\begin{array}{r} 35 \\ + 7 \\ \hline \end{array}$$

Let's add the numbers!

$$\begin{array}{r} 26 \\ +23 \\ \hline \end{array}$$

$$\begin{array}{r} 24 \\ +24 \\ \hline \end{array}$$

$$\begin{array}{r} 35 \\ + 11 \\ \hline \end{array}$$

$$\begin{array}{r} 28 \\ +22 \\ \hline \end{array}$$

$$\begin{array}{r} 17 \\ +23 \\ \hline \end{array}$$

$$\begin{array}{r} 12 \\ +17 \\ \hline \end{array}$$

$$\begin{array}{r} 29 \\ + 11 \\ \hline \end{array}$$

$$\begin{array}{r} 35 \\ +12 \\ \hline \end{array}$$

$$\begin{array}{r} 36 \\ + 4 \\ \hline \end{array}$$

$$\begin{array}{r} 24 \\ +26 \\ \hline \end{array}$$

$$\begin{array}{r} 45 \\ +3 \\ \hline \end{array}$$

$$\begin{array}{r} 37 \\ + 2 \\ \hline \end{array}$$

$$\begin{array}{r} 15 \\ +13 \\ \hline \end{array}$$



$$\begin{array}{r} 20 \\ +29 \\ \hline \end{array}$$



$$\begin{array}{r} 41 \\ + 1 \\ \hline \end{array}$$

$$\begin{array}{r} 15 \\ +7 \\ \hline \end{array}$$

Solve the questions!

 = 17	 = 24	 = 7
--	--	---

1  +  = _____

2  +  = _____

3  +  +  = _____

4  +  +  = _____

5  +  +  +  = _____

6  +  +  +  = _____