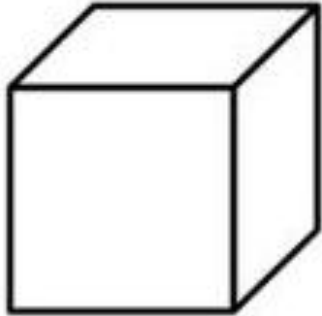


Chapter 19: Three-dimensional Shapes

- i. Write the name of each shape. Find the number of faces, edges and vertices of each shape.

A)



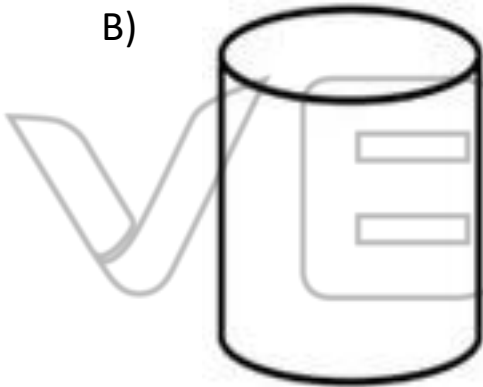
Faces

Edges

Vertices

Name: _____

B)



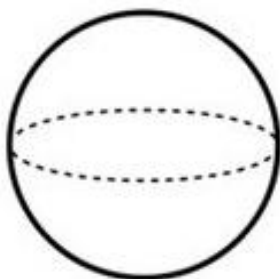
Faces

Edges

Vertices

Name: _____

C)



Faces

Edges

Vertices

Name: _____

D)



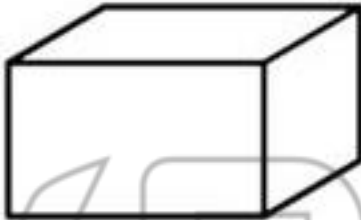
Faces

Edges

Vertices

Name: _____

E)



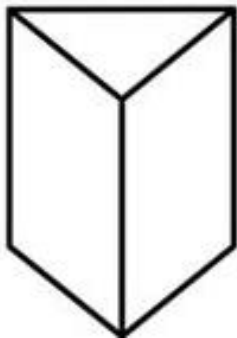
Faces

Edges

Vertices

Name: _____

F)



Faces

Edges

Vertices

Name: _____

ii. Match each net to its solid shape.

